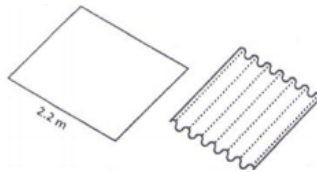




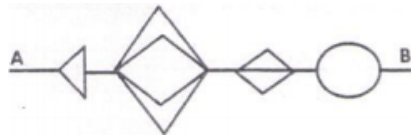
CLASS ASSIGNMENT

UGC PAPER DEC – 2014

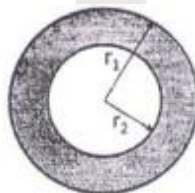
1. We define a function $f(N)$ = sum of digits of N , expressed as decimal number. $g f(1\ 3\ 7) = 1+3+7=11$. Evaluate $f(2^7 3^5 5^6)$
1. 10 2. 18 3. 28 4. 11
2. Every month the price of a particular commodity falls in this order:
1024, 640, 400, 250, ...
What is the next value?
1. 156.25 2. Approximately 39 3. 64 4. 40
3. A 2.2 m wide rectangular steel plate is corrugated as shown in the diagram. Each corrugation is a semi-circle in cross section having a diameter of 7 cm. What will be the width of steel sheet after it is corrugated?



1. 1.4 m 2. 1.6 m 3. 0.7 m 4. 1.1 m
4. A mouse has to go from point A to B without retracing any part of the path, and never moving backwards. What is the total number of distinct paths that the mouse may take to go from A to B?



1. 11 2. 48 3. 72 4. 24
5. What is the next term in the following sequence?
7, 11, 13, 17, 19, 23, 29, ...
1. 37 2. 35 3. 31 4. 33
6. If N, E and T are distinct positive integers such that $N \times E \times T = 2013$, then which of the following is the maximum possible sum of N, E and T ?
1. 39 2. 2015 3. 675 4. 671
7. The areas of the inner circle and the shaded ring are equal. The radii r_1 and r_2 are related by



1. $r_1 = r_2$ 2. $r_1 = r_2 \sqrt{2}$ 3. $r_1 = r_2 \sqrt{3}$ 4. $r_1 = 2r_2$
8. Which of the following numbers is a perfect square?
1. 1022121 2. 2042122 3. 3063126 4. 4083128
9. What is the 94th term of the following sequence? 1, 1, 2, 2, 2, 2, 3, 3, 3, 3, 3, 3, 4, 4, 4, 4, 4, 4, ...
1. 8 2. 9 3. 10 4. 11



1. T

2. A

3. L

4. K

19. In each of the following groups of words is a hidden number, based on which you should arrange them in ascending order. Pick the right answer:

A. Tinsel event

B. Man in England

C. Good height

D. Last encounter

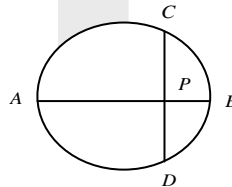
1. A, B, C, D

2. C, B, D, A

3. A, C, D, B

4. C, D, B, A

20. AB is the diameter of a circle. The chord CD is perpendicular to AB intersecting it at P. If $CP=2$ and $PB=1$, the radius of the circle is



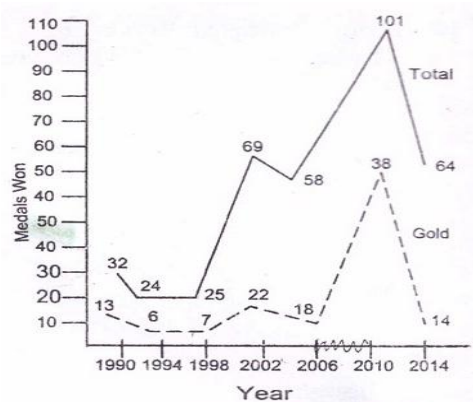
1. 1

2. 2.5

3. 2

4. 5

21.



Based on the graph, which of the following statements is NOT true?

- Number of gold medals increased whenever total number of medals increased
- Percentage increase in gold medals in 2010 over 2006 is more than the corresponding increase in total medals.
- Every time non-gold medals together account for more than 50% of the total medals
- Percentage increase in gold medals in 2010 over 2006 is more than the corresponding increase in 2002 over 1998

UGC PAPER DEC – 2015

22. Three boxes are coloured red, blue and green and so are three balls. In how many ways can one put the balls one in each box such that no ball goes into the box of its own colour?

1. 1

2. 2

3. 3

4. 4

23. Write $d = 1$ degree, $r = 1$ radian and $g = 1$ grad. Then which of the following is true? (100 grad = a right angle)

1. $\cos d < \cos r < \cos g$

2. $\cos r < \cos g < \cos d$

3. $\cos r < \cos d < \cos g$

4. $\cos g < \cos d < \cos r$

24. The number of diagonals of a convex dodecagon (12-gon) is

1. 66

2. 54

3. 55

4. 60

25. A vendor sells articles having a cost price of Rs. 100 each. He sells these articles at a premium price during the first eight months, and at a sale price, which is half of the premium price, during next four months. He makes a net profit of 20% at the end of the year. Assuming that equal numbers of articles are sold each month, what is the premium price of the article?



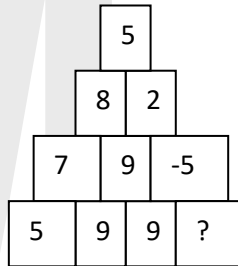
1. 122

2. 144

3. 150

4. 160

26. The missing number is




1. -19

2. -5

3. 9

4. -9

27.



The minimum number of straight lines required to connect the nine points above without lifting the pen or retracing is

1. 3

2. 4

3. 5

4. 6

28.

Suppose three meetings of a group of professors were arranged in Mumbai, Delhi and Chennai. Each professor of the group attended exactly two meetings. 21 professors attended Mumbai meeting, 27 attended Delhi meeting and 30 attended Chennai meeting. How many of them attended both the Chennai and Delhi meetings?

1. 18

2. 24

3. 26

4. Cannot be found from the above information.

29.

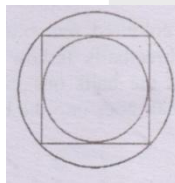
Decode

G	E	N	T	S	T	U
I	S	S	O	L	V	D
L	I	I	S	P	A	E
L	M	H	T	R	B	N
E	E	L	B	O	L	T
T	N	I	Y	B	E	S

1. GENT STUDENTS CAUSE LITTLE HEART BURNS
2. STUDENTS ARE INTELLIGENT BUT PROBLEM IS NOT SOLVABLE
3. THIS PROBLEM IS UNSOLVABLE BY ANY STUDENT
4. THIS PROBLEM IS SOLVABLE BY INTELLIGENT STUDENTS

30.

There is an inner circle and an outer circle around a square. What is the ratio of the area of the outer circle to that of the inner circle?



1. $\sqrt{2}$

2. 2

3. $2\sqrt{2}$

4. $\sqrt{3/2}$

31.

The probability that a ticketless traveler is caught during a trip is 0.1. If the traveler makes 4 trips, the probability that he/she will be caught during at least one of the trips is:



1. $1 - (0.9)^4$ 2. $(1 - 0.9)^4$ 3. $1 - (1 - 0.9)^4$ 4. $(0.9)^4$

32. Let A, B be the ends of the longest diagonal of the unit cube. The length of the shortest path from A to B along the surface is

1. $\sqrt{3}$ 2. $1 + \sqrt{2}$ 3. $\sqrt{5}$ 4. 3

33. How many digits are there in 3^{16} when it is expressed in the decimal form?

1. Three 2. Six 3. Seven 4. Eight

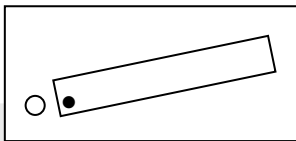
34. "The clue is hidden in this statement", read the note handed to Sherlock by Moriarty, who hid the stolen treasure in one of the ten pillars. Which pillar is it?

1. X 2. II 3. III 4. IX

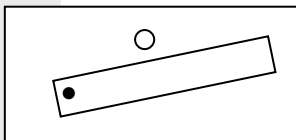
UGC PAPER JUNE - 2016

35. Which will be the next figure in the following sequence?

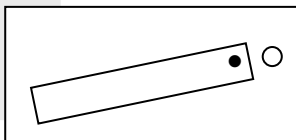
A



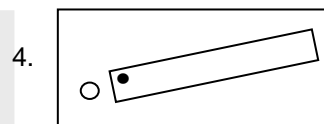
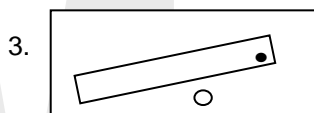
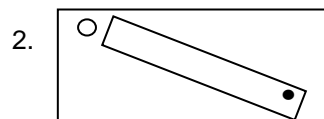
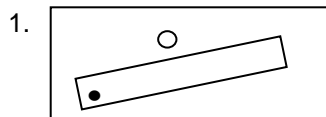
B



C



D ?



36. For a certain regular solid: number of faces + number of vertices = number of edges + 2. For three such distinct (not touching each other) objects, what is the total value of faces + vertices - edges?

1. Two 2. Four 3. Six 4. Zero

37. Abdul travels thrice the distance Catherine travels, which is also twice the distance that Binoy travels. Catherine's speed is $\frac{1}{3}$ of Abdul's speed, which is also $\frac{1}{2}$ of Binoy's speed. If they start at the same time then who reaches first?

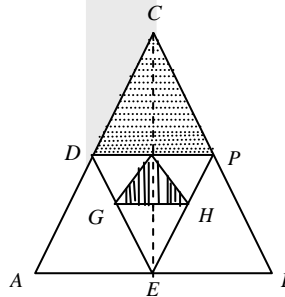
1. Both Abdul and Catherine 2. Binoy
3. Catherine 4. All three together

38. It takes 2 hours for Tiwari and Deo to do a job. Tiwari and Hari takes 3 hours to do the same job. Deo and Hari take 6 hours to do the same job. Which of the following statements is incorrect?



1. Tiwari alone can do the job in 3 hours
2. Deo alone can do the job in 6 hours
3. Hari does not work at all
4. Hari is the fastest worker

39. Equilateral triangles are drawn one inside the other as shown. What is the ratio of the two shaded areas?



- | | |
|--------|-------------------|
| 1. 2:1 | 2. $\sqrt{3} : 4$ |
| 3. 4:1 | 4. 8:1 |

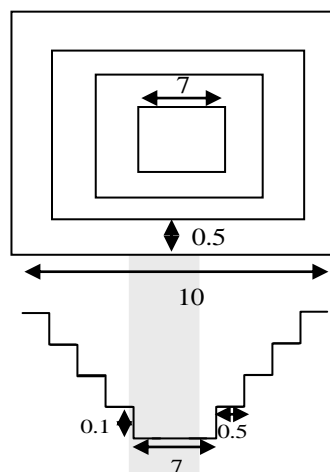
40. A train running at 36 km/h crosses a mark on the platform in 8 sec and takes 20 sec to cross the platform. What is the length of the platform?

- | | |
|----------|----------|
| 1. 120 m | 2. 280 m |
| 3. 40 m | 4. 160 m |

41. When a polynomial $f(x)$ is divided by $x-5$ or $x-3$ or $x-2$ it leaves a remainder of 1. Which of the following would be the polynomial?

- | | |
|-----------------------------|-----------------------------|
| 1. $x^3 - 10x^2 + 31x + 31$ | 2. $x^3 - 10x^2 + 31x - 29$ |
| 3. $x^3 - 10x^2 + 31x - 31$ | 4. $x^3 - 10x^2 + 31x + 29$ |

42. The diagram (not to scale) shows the top view and cross section of a pond having a square outline and equal sized steps of 0.5 m width and 0.1 m height. What will be the volume of water (in m^3) in the pond when it is completely filled?

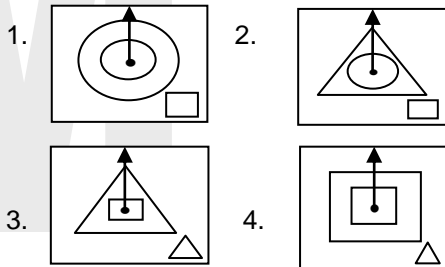


- | | | | |
|---------|---------|---------|---------|
| 1. 40.0 | 2. 29.4 | 3. 19.4 | 4. 11.3 |
|---------|---------|---------|---------|

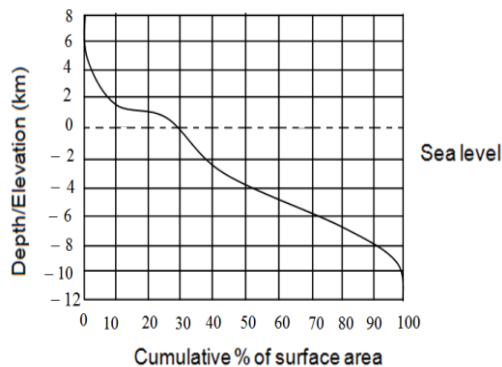
43. D is a point on AC in the following triangle such that $\angle ADB = \angle ABC$. Then BD (in cm) is



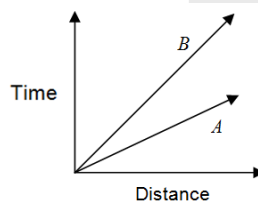
?



- 60.** A person completely under sea water tracks the Sun. Compared to an observer above water, which of the following observations would be made by the underwater observer?
1. Neither the time of sunrise or sunset nor the angular span of the horizon changes.
 2. Sunrise is delayed, sunset is advanced, but there is no change in the angular span of the horizon.
 3. Sunrise and sunset times remain unchanged, but the angular span of the horizon shrinks.
 4. The duration of the day and the angular span of the horizon, both decrease.
- 61.** A man sells three articles A, B, C and gains 10% on A, 20% on B and loses 10% on C. He breaks even when combined selling prices of A and C are considered, whereas he gains 5% when combined selling prices of B and C are considered. What is his net loss or gain on the sale of all the articles?
1. 10% gain
 2. 20% gain
 3. 10.66% gain
 4. 6.66% gain
- 62.** Based on the distribution of surface area of the Earth at different elevations and depths (with reference to sea-level) shown in the figure, which of the following is FALSE?



1. Larger proportion of the surface of the Earth is below sea-level.
 2. Of the surface area above sea-level, larger proportion lies below 2 km elevation
 3. Of the surface area below sea-level, smaller proportion lies below 4 km depth
 4. Distance from sea level to the maximum depth is greater than that to the maximum elevation.
- 63.** Time-distance graph of two objects A and B are shown.



If the axes are interchanged, then the same information is shown by



4. the upwind location aids the tiger by not letting its smell reach the prey

69. A cellphone tower radiates 1W power while the handset transmitter radiates 0.1 mW power. The correct comparison of the radiation energy received by your head from a tower 100m away (E_1) and that from a handset held to your ear (E_2) is
1. $E_1 \gg E_2$
 2. $E_2 \gg E_1$
 3. $E_1 = E_2$ for communication to be established
 4. insufficient data even for a rough comparison

70. The pitch of a spring is 5 mm. The diameter of the spring is 1 cm. The spring spins about its axis with a speed of 2 rotations/s. The spring appears to be moving parallel to its axis with a speed of
1. 1 mm/s
 2. 5 mm/s
 3. 6 mm/s
 4. 10 mm/s

71. The dimensions of a floor are 18×24 . What is the smallest number of identical square tiles that will pave the entire floor without the need to break any tile?
1. 6
 2. 24
 3. 8
 4. 12

72. To determine the number of parrots in a sparse population, an ecologist captures 30 parrots and puts rings around their necks and releases them. After a week he captures 40 parrots and finds that 8 of them have rings on their necks. What approximately is the parrot population?
1. 70
 2. 150
 3. 160
 4. 100

73. The mid-point of the arc of a semicircle is connected by two straight lines to the ends of the diameter as shown. What is the ratio of the shaded area to the area of the triangle?



1. $\frac{\pi}{2} - 1$
2. $\frac{\pi - 1}{2}$
3. $\pi - 1/2$
4. $2\pi - 1/4$

74. Why is there low fish population in lakes that have large hyacinth growth?
1. Hyacinth prevents sunlight from reaching the depths of the lake.
 2. Decaying matter from hyacinth consumes dissolved oxygen in copious amounts.
 3. Hyacinth is not a suitable food for fishes.
 4. Hyacinth releases toxins in the water.

UGC PAPER JUNE - 2017

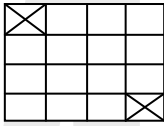
75. N is a two digit number such that the product of its digits when added to their sum equals N. The unit digit of N would be
1. 1
 2. 7
 3. 8
 4. 9

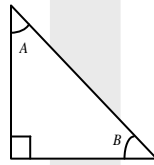
76. If $P + \frac{1}{Q} = 1$ and $Q + \frac{1}{R} = 1$, then what is PQR?
1. -1
 2. 2
 3. -2
 4. cannot be calculated

77. What is the remainder when 3^{256} is divided by 5?
1. 1
 2. 2
 3. 3
 4. 4

78. If equal weights of 22 carat gold (alloy of 22 parts gold and 2 parts copper by weight) and 24 carat gold (pure gold) are mixed to form an alloy, what will be the weight proportion of copper in the alloy?



79. 1. $\frac{1}{2}$ 2. $\frac{1}{8}$ 3. $\frac{1}{12}$ 4. $\frac{1}{24}$
- 
- A 4m × 4m floor needs to be covered by tiles of size 2m × 1m. Two diagonally opposite corners of size 1m × 1m should be left uncovered. How many tiles are required to complete the job without breaking the tiles or overlapping them?
1. 6 2. 7 3. 8 4. Impossible to cover
80. If $42 \rightarrow 26$, $71 \rightarrow 78$, $33 \rightarrow 16$, then $62 \rightarrow$
1. 68 2. 54 3. 38 4. 39
81. A shopkeeper sells a file and a notebook for Rs. 27 to the first customer, a notebook and a pen for Rs. 31 to the second customer and a pen and file for Rs. 29 to the third customer. The prices of the items are rounded in rupees. Which of the following inferences is correct?
1. The pen is the costliest of the three
2. The file is the costliest of the three
3. the notebook is the costliest of the three
4. The shopkeeper sold the different items to different customers at different rates.
82. Consider a square of side a. Fit the largest possible circle inside it and the largest possible square inside the circle. What is the side length of the innermost square?
1. $\frac{a}{\pi\sqrt{2}}$ 2. $\frac{a}{2}$ 3. $\frac{a}{2\sqrt{2}}$ 4. $\frac{a}{\sqrt{2}}$
83. Walking from my home at a speed of 5 km/h I am 8 minutes late in reaching my office. If I walk at a speed of 8 km/h I reach 5 minutes late. How far is my office from the house?
1. 2 km 2. 1/3 km 3. 2/3 km 4. 1/2 km
84. A, B and C are three distinct digits. If they are added as below,
- | | | | |
|---|---|---|---|
| | A | B | C |
| + | A | B | C |
| + | A | B | C |
| | | | |
| | C | C | C |
- find out the value of A, B and C
1. A = 3, B = 4, C = 5 2. A = 2, B = 3, C = 1
3. A = 5, B = 1, C = 3 4. A = 1, B = 8, C = 5
85. A tight fitting band is wrapped around the Equator. Another circular band whose length is 15 m more lies at a certain height over the first band. A group of human beings attempt to pass under the longer band. Can they walk under it? (Earth's circumference is roughly 40,000 km. The height of human beings is between 1 & 2 m)
1. Yes 2. No
3. Can not be determined 4. Only those with the height less than 1.7 m
86. L is the tallest and eldest of a group of five people K, L, M, N and P. M is elder to N and shorter than K. M and P are of same age and P is taller than K. N and K are of same height and K is younger to P. Which of the following inferences is certain?
1. P is taller than M 2. N is the youngest
3. N is elder to P 4. N is elder to K



1. $-\frac{1}{2}$

2. 1

3. $+\frac{1}{2}$

4. -1

UGC PAPER DECEMBER - 2017

95. A boy holds one end of rope of length l and the other end is fixed to a thin pole of radius r ($r \ll l$). Keeping the rope taut, the boy goes around the pole causing the rope to get wound around the pole. Each round takes 10 s. What is the speed (in units of s^{-1}) with which the boy approaches the pole?

1. $\frac{\pi r}{5}$

2. $\frac{\pi l}{5}$

3. $20\pi(r + l)$

4. $\frac{2\pi(l - r)}{5}$

96. The smallest square floor which can be completely paved with tiles of size 8×6 , without breaking any tile, needs n tiles. Find n

1. 56

2. 12

3. 24

4. 48

97. A 2 m long ladder is to reach a wall of height 1.75 m. The largest possible horizontal distance of the ladder from the wall could be

1. slightly less than 1 m

2. slightly more than 1 m

3. 1 m

4. 1.2 m

98. A rectangular flask of length 11 cm, width 8 cm and height 20 cm has water filled upto height 5 cm. If 21 spherical marbles of radius 1 cm each are dropped in the flask, what would be the rise in water level?

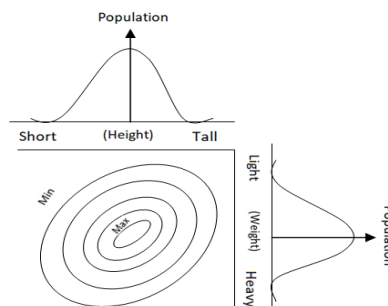
1. 8.8 cm

2. 10 cm

3. 1 cm

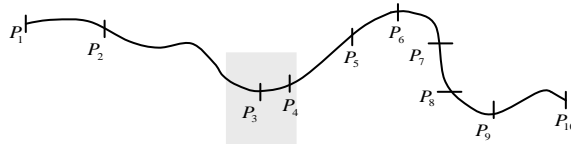
4. 0 cm

99. Contours in the bivariate (weight, height) graph connect regions of approximately equal populations. Which of the following interpretations is correct?

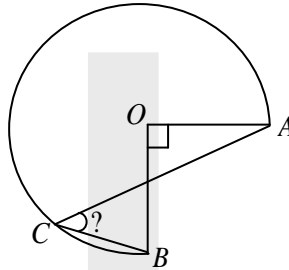


1. There is no correlation between height and weight of the population.
2. Heavier individuals are likely to be taller than lighter individuals.
3. Taller and lighter individuals are more in number than taller and heavier individuals.
4. There are no individuals of medium weight and medium height.

100. A path between points P_1 and P_{10} on a level ground is shown, and positions of a moving object at 1 second intervals are marked. Which of the following statements is correct?



1. The motion is uniform
 2. The speed between P_3 and P_4 is greater than that between P_5 and P_6
 3. The speed from P_1 to P_2 increases because of downward slope
 4. The section P_3 to P_4 is covered at the slowest speed
101. A new tyre can be used for at most 90 km. What is the maximum distance (in km) that can be covered by a three wheeled vehicle carrying one spare wheel, all four tyres being new?
1. 180
 2. 90
 3. 120
 4. 270
102. A plate of $5\text{m} \times 2\text{m}$ size with uniform thickness, weighing 20 kg, is perforated with 1000 holes of $5\text{cm} \times 2\text{cm}$ size. What is the weight of the plate (in kg) after perforation?
1. 10
 2. 2
 3. 19.8
 4. 18
103. What is the maximum number of cylindrical pencils of 0.5 cm diameter that can be stood in a square shaped stand of $5\text{cm} \times 5\text{cm}$ inner cross section?
1. 99
 2. 121
 3. 100
 4. 105
104. The sum of two numbers is equal to sum of square of 11 and cube of 9. The larger number is $(5)^2$ less than square of 25. What is the value of the sum of twice of 24 percent of the smaller number and half of the larger number?
1. 415
 2. 400
 3. 410
 4. 420
105. What is the volume of soil in an open pit of size $2\text{m} \times 2\text{m} \times 10\text{cm}$?
1. 40 m^3
 2. 0.4 m^3
 3. 0 m^3
 4. 4.0 m^3
106. For which values of A and B is $\sin A = \cot B$?
1. $A = B = 0$
 2. $A = B = \frac{\pi}{2}$
 3. $A = 0, B = \frac{\pi}{2}$
 4. $A = \frac{\pi}{2}, B = 0$
107. For which one of the following statements is the converse NOT true?
1. If a patient dies even with excellent medical care, he likely had terminal illness.
 2. If a person gets employed, he has good qualifications.
 3. If an integer is even, it is divisible by two.
 4. If an integer is odd, it is not divisible by two.
108. Four small squares of side x are cut out of a square of size 12 cm to make a tray by folding the edges. What is the value of x so that the tray has the maximum volume?
1. 6 cm
 2. 2 cm
 3. 3 cm
 4. 4 cm
109. Two runners A and B start running from diametrically opposite points on a circular track in the same direction. If A runs at a constant speed of 8 km/h and B at a constant speed of 6 km/h and A catches up with B in 30 minutes, what is the length of the track?
1. 1 km
 2. 4 km
 3. 3 km
 4. 2 km
110. Three quarters of a circle is shown in the figure, OA and OB are two radii perpendicular to each other. C is a point on the circle.



What is angle of ACB?

1. Cannot be determined 2. 30° 3. 60° 4. 45°

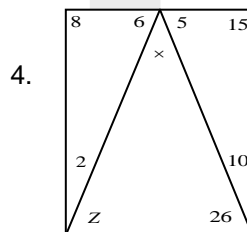
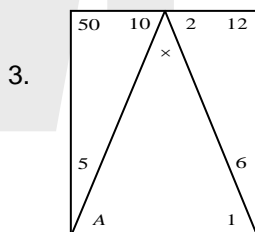
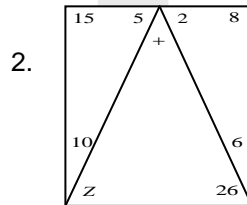
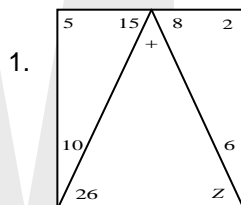
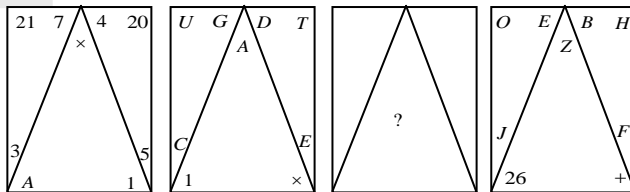
111. If a plant with green leaves is kept in a dark room with only green light ON, which one of the following would we observe?

1. The plant appears brighter than the surroundings
2. The plant appears darker than the surroundings
3. We cannot distinguish the plant from the surroundings
4. It will have above normal photosynthetic activity

112. A person purchases two chains from a jeweller, one weighing 18 g made of 22 carat gold and another weighing 22 g made of 18 carat gold. Which one of the following statements is correct?

1. 22 carat chain contains $\frac{2}{11}$ times more gold than 18 carat chain.
2. 22 carat chain contains $\frac{1}{11}$ times more gold than 18 carat chain.
3. Both chains contain the same quantity of gold.
4. 18 carat chain contains $\frac{2}{11}$ times more gold than 22 carat chain.

113. Find the missing pattern

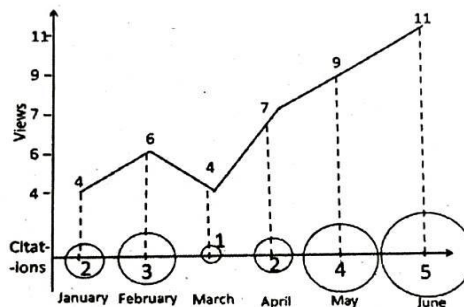




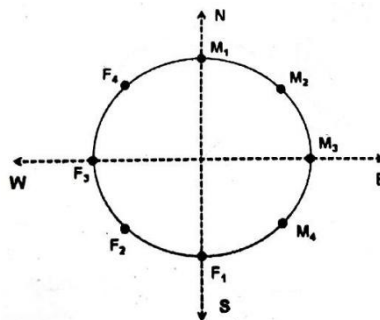
114. There are small and large bacteria of the same species. If S is surface area and V is volume, then which of the following is correct?
1. $S_{\text{small}} > S_{\text{large}}$
 2. $V_{\text{small}} > V_{\text{large}}$
 3. $(S/V)_{\text{small}} > (S/V)_{\text{large}}$
 4. $(S/V)_{\text{small}} < (S/V)_{\text{large}}$

UGC PAPER JUNE - 2018


115. The area of the triangle formed by joining the points $(2017, 2017)$, $(2027, 2027)$ and $(2037, 2017)$ is
1. 2017
 2. 100
 3. $100\sqrt{10}$
 4. $100\sqrt{20}$
116. A stick of length L is broken into two pieces at random. What is the average length of the smaller piece?
1. $L/6$
 2. $L/4$
 3. $L/3$
 4. $L/2$
117. Number of times a research paper is viewed and cited is shown in the plot. In which month was the percentage increase in citation more than the double of the percentage increase in view?



1. February
 2. April
 3. May
 4. June
118. Four males M_1, M_2, M_3, M_4 and four females F_1, F_2, F_3, F_4 are sitting around a round table facing away from the table, as shown in the figure. If each one moves three positions to his/her right and then one position to the left, then in which direction does F_4 face?



1. East
 2. North-East
 3. North-West
 4. North
119. In the diagram, what is the ratio of the total shaded area (of the circle and semi-circle) to the total area of the square and the rectangle?



1. $\frac{5}{6}\pi$
2. $\frac{6}{5}\pi$
3. $\frac{5}{12}\pi$
4. $\frac{\pi}{4}$



120. Which of the following options is the best choice for the missing number?

0.1, 0.25, 0.3, 0.2, 0.5, 0.6, 0.3, _____, 0.9, 0.4, 1.0, 1.2

1. 1.05 2. 0.85 3. 0.75 4. 0.65

121. Fourteen of the students in a class are girls. Eight students in the class wear blue shirts. Two are neither girls nor wear blue shirts. Five students who wear blue shirts are girls. How many students are there in the class?

1. 19 2. 29 3. 17 4. 24

122. Prof. Murthy likes to let her students choose who their partners will be; however, no pair of students may work together for more than seven class periods in a row. Alice and Bob have worked together for seven class periods in a row. Calvin and Denny have worked together for three class periods in a row. Calvin does not want to work with Alice. Who should be assigned to work with Bob?

1. Calvin 2. Alice 3. Denny 4. None

123. Three semi-circles are drawn inside a big circle as shown in the figure. If the radius of the two identical smaller semi-circles is $\frac{1}{4}$ th of that of the big circle and the radius of the bigger semi-circle is twice that of the small semi-circle, what proportion of the big circle's area is shaded?



1. $\frac{11}{12}$ 2. $\frac{12}{16}$ 3. $\frac{13}{16}$ 4. $\frac{13}{14}$

124. A ball is dropped from a height of 100 m. The ball after each bounce rises vertically by half its previous height (This means at the first bounce it rises by 50 m, by 25 m at the second bounce and so on). What is the vertical distance travelled by the ball between the first and the fifth bounces?

1. $\frac{355}{2}$ m 2. $\frac{365}{2}$ m 3. $\frac{375}{2}$ m 4. $\frac{385}{2}$ m

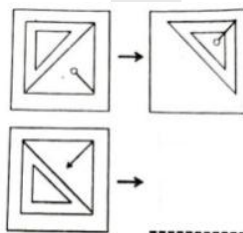
125. Consider a number 54 expressed in a base different from ten. What is the base of this number system if its equivalent value in the decimal system is 49?

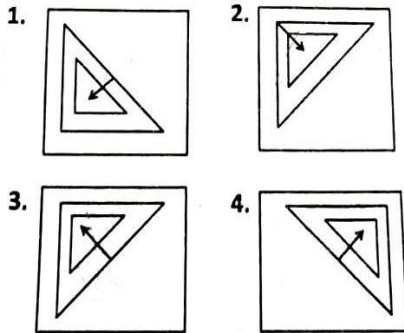
1. 1 2. 3 3. 6 4. 9

126. A fuel station sold diesel costing Rs 15000 to 150 persons on a day. If the lower limit of sale to a person is Rs 50, what is the maximum amount in rupees for which one person could have purchased diesel on that day?

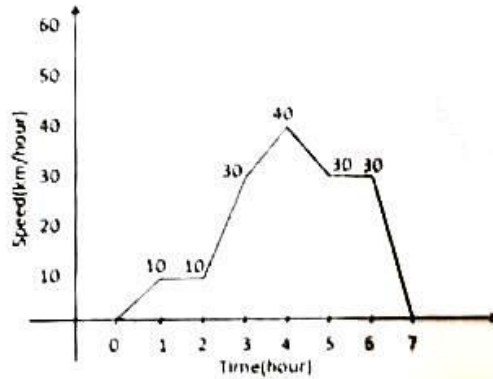
1. 7450 2. 7500 3. 7550 4. 7600

127. Which of the options is appropriate for the blank space?





128. If Sangeeta's daughter is my daughter's mother, then how am I related to Sangeeta?
1. Son is the only possibility
 2. Son-in-law is the only possibility
 3. Daughter is the only possibility
 4. Son-in-law or daughter
129. In a group of 44 players, 26 play hockey, 24 play football and 24 play cricket. Eight of them play both hockey and football, 12 play both football and cricket, and 5 play all the three games. How many play both hockey and cricket?
1. 10
 2. 15
 3. None
 4. 7
130. It is given that
$$\left. \begin{aligned} (a)^* &= a \text{ if } a > 0 \\ &= 0 \text{ if } a \leq 0 \end{aligned} \right\} \text{ for any real number } a. \text{ Suppose for two real numbers } x \text{ and } y,$$
$$(xy)^* = (x)^* (y)^*.$$
 Then which of the following is necessarily true?
1. $x > 0$ and $y > 0$
 2. $\{x < 0 \text{ and } y < 0\}$ or $\{x > 0 \text{ and } y > 0\}$
 3. $\{x \leq 0 \text{ and } y \leq 0\}$ or $\{x \geq 0 \text{ and } y \geq 0\}$
 4. $\{x \geq 0\}$ or $\{y \geq 0\}$ or $\{x \geq 0 \text{ and } y \geq 0\}$
131. A long-distance runner finds a water station after completing $\frac{1}{7}$ th of the total distance. After covering another $\frac{1}{6}$ th of the total distance he gets medical-aid. Another runner joins him 4 km after the medical-aid station. The second runner stops 4 km before the completion of run, covering $\frac{1}{2}$ of the total distance. What is the total distance?
1. 21 km
 2. 30 km
 3. 42 km
 4. 50 km
132. A and B move clockwise around a circle, starting from a common point O. A takes 9 minutes to complete a round but re-starts after a delay of 1 minute. B takes 13 minutes to complete the round but restarts after a delay of 2 minutes. How many minutes after they began would they meet again at O?
1. 30
 2. 29
 3. 31
 4. 28
133. Two students are solving the same problem independently. If the probability that the first one solves the problem is $\frac{3}{5}$ and the probability that the second solves the problem is $\frac{4}{5}$, what is the probability that at least one of them solves the problem?
1. $\frac{17}{25}$
 2. $\frac{19}{25}$
 3. $\frac{21}{25}$
 4. $\frac{23}{25}$
134. Movement of a car with respect to time is given below:

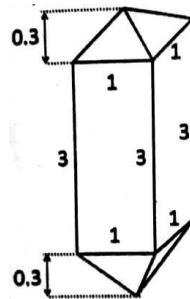


The average speed of the car is

1. 30.42 2. 20.43 3. 10.43 4. 21.43

UGC PAPER DECEMBER - 2018

135. The diagram shows the dimensions (in cm) of a zircon crystal having a square prism and two identical square pyramids. What is the volume of this crystal (in cm^3)



1. 3.2 2. 3.6 3. 6.4 4. 7.2

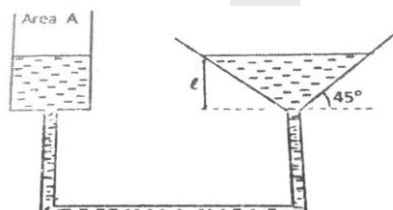
136. A boy throws a ball with a speed v at a vehicle that is approaching him with a speed V . After bouncing from the vehicle, the ball hits the boy with a speed

1. v 2. $v+V$ 3. $v+2V$ 4. $V+4V$

137. Four friends were sharing a pizza. They decided that the oldest friend will get an extra piece of pizza. Bahu is two months older than Kattappa, who is turn is three months younger than Bhalta. Devsena is one month older than Kattappa. Who should get the extra piece of pizza?

1. Bahu 2. Devsena
3. Bhalta 4. Kattappa

138. A funnel is connected to a cylindrical vessel of cross sectional area A as shown, to make an interconnected system of vessels. Water is poured in the cylinder such that the height of water in the funnel is l as shown. If the level of water in the cylindrical vessel is pushed down by a distance $x \ll l$, the level of water in the funnel:





1. Remains unchanged

2. Rises by $\frac{Ax}{\pi\ell^2}$

3. Rises by $\frac{\pi\ell^2}{Ax}$

4. Rises by $\frac{A^2x}{\pi^2\ell^4}$

139. Marks (out of 30) of seven students in an examination are 4,15,6,7,5, a and b, where a (>0) is a multiple of 4 and b is a prime. What is the maximum possible value of the range of marks (i.e., maximum mark –minimum mark) ?

1. 25

2. 26

3. 27

4. 29

140. Two persons A and B starts walking in opposite direction from a point. A travels twice as fast as B. The speed at which B travels is 1 km/h. If A travels 2 km and turns back and starts walking towards B, at what distance from the starting point will A cross B ?

1. 2 km

2. 4 km

3. 6 km

4. 8 km

141. A person wanted to travel from Charbag to Alambag with an average speed of 60 km/h by car. The distance between Charbag and Alambag is 2 km. Due to heavy traffic, he could travel at 30 km/h for the first kilometer of his journey. What should his speed be for the remaining journey to achieve his average speed target of 60 km/h?

1. Cannot achieve his target with any finite speed

2. 60 km /h

3. 90 km /h

4. 120 km/h

142. The average rainfall over a given place during the three – year period of 2003-2005 was 65 cm. During the three – year period 2002-2004 the average rainfall was 63 cm. The actual rainfall during 2005 was 60 cm. What was the rainfall in 2002?

1. 55 cm

2. 60 cm

3. 54 cm

4. 53 cm

143. In a four consecutive day schedule, four pilots flew flights each on a different day. Mr. A was scheduled to work on Monday, but he traded with Ms. B who was originally scheduled to work on Wednesday. Ms C traded with Mr. D, who was originally scheduled to work on Thursday. After all the switching was done, who worked on Tuesday?

1. Mr. A

2. Mr. D

3. Ms. B

4. Ms. C

144. After 6 g of carbon is completely burnt in an atmosphere of 40 g of oxygen, the percentage oxygen left is:

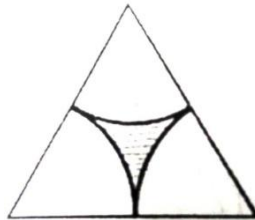
1. 80

2. 60

3. 40

4. 20

145. What fraction of the equilateral triangle shown below with three identical sectors of a circle is shaded?



1. $1 - \frac{\pi}{2\sqrt{3}}$

2. $\frac{\pi}{2\sqrt{3}}$

3. $1 - \frac{2\pi}{\sqrt{3}}$

4. $1 - \frac{\sqrt{3}\pi}{2}$

146. How many different salads can be made from cucumber, tomatoes, onions, beetroot and carrots?

1. 16

2. 28

3. 31

4. 32

147. A bottle of perfume is opened and a person at a distance of 10 m gets the smell after 10 seconds. The time taken for a person 20m away to get the smell is about



1. 20 s

2. 40 s

3. 14 s

4. 80 s

148. A mineral contains a cubic and a spherical cavity. The length of the side of the cube is the same as the diameter of the sphere. If the cubic cavity is half filled with a liquid and the spherical cavity is completely filled with liquid, what is the approximate ratio of the volume of liquid in the cubic cavity to that in the spherical cavity?

1. 2:1

2. 1:1

3. 1:2

4. 1:4

149. Out of 6 unbiased coins, 5 are tossed independently and they all result in heads. If the 6th is now independently tossed, the probability of getting head is


1. 1

2. 0

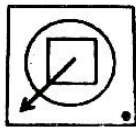
3. 1/2

4. 1/6

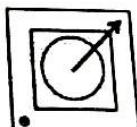
150. What could the fourth figure in the sequence be?



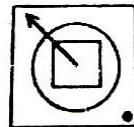
1.



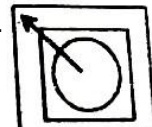
2.



3.



4.



151. The average age of A,B and C, whose ages are integers x,y and z respectively ($x \leq y \leq z$), is 30. If the age of B is exactly 5 more than that of A, what is the minimum possible value of z ?

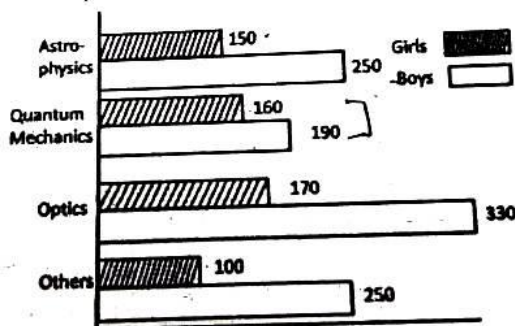

1. 31

2. 33

3. 35

4. 37

152. Percentage-wise distribution of all science students in a university is given in the pie-diagram. The bar chart shows the distribution of physics students in different sub-areas, where a student takes one and only one sub-area. What percentage of the total science students is girls studying quantum mechanics?



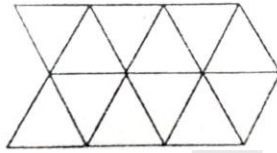
1. 10

2. 1

3. 0.2

4. 2

153. What is the total number of parallelograms in the given diagram?



1. 27

2. 24

3. 22

4. 14

154. Election results of a city, which contains 3 segments (A, B and C) are given in the table. Percentage votes obtained by parties X, Y and Z are also shown. Which party won the election?

Segment	Total Voters	% of voting	X	Y	Z
A	2,00,000	60	30	30	40
B	2,50,000	70	40	30	30
C	3,00,000	80	30	40	30

1. Y
2. X
3. Z
4. It was a tie between X and Y

CSIR UGC NET JUNE - 2019

155. The number of digits you have to type to write all the page numbers of a book starting from 1 (first page) is 2019. What is the number of pages in that book?

1. 609

2. 610

3. 709

4. 710

156. A student received the following marks in the five of the six courses: 91, 86, 81, 79 and 92. Average of his marks in six subjects is 85. How many marks did he receive in the sixth subject?

1. 83

2. 85

3. 81

4. 88

157. Salesperson 'A' sells an object at a price Rs. 5 less than the marked price, receiving a commission of 5% on the selling price. The same object is sold by person 'B' at a price Rs. 15 less than the marked price, receiving a commission of 15% on the selling price. If both A and B receive the same amount in commission, then what is the marked price of the object?

1. 10

2. 20

3. 22.5

4. 30

158. A ball rotates at a rate r rotations per second and simultaneously revolves around a stationary point O at a rate R revolutions per second ($R < r$). The rotation and revolution are in the same sense. A certain point on the ball is in the line of the centre of the ball and point O at a certain time. This configuration repeats after a time

1. $\frac{1}{r-R}$

2. $\frac{1}{R} - \frac{1}{r}$

3. $\frac{1}{r+R}$

4. $\frac{1}{R} + \frac{1}{r}$

159. There are two examinations, A and B in a subject which are evaluated out of 30 and 70 marks, respectively. In order to pass the course the student has to get at least 40% in total and at least 40% in B. The following are the marks of the students S_1 to S_4 .

Students	A	B
S_1	12	28
S_2	10	29
S_3	16	27
S_4	05	29

The only student/s to have passes is/are

1. S_1, S_3

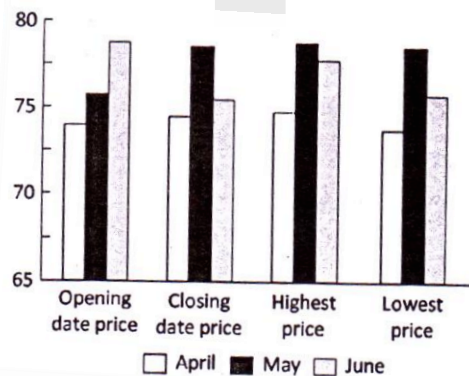
2. S_1, S_2, S_4

3. S_1, S_2

4. S_1



160. Two forest patches have, respectively, 100 and 200 teak trees of the same age. In a given season, all trees shed some of their leaves at random. The daily total collections of the leaf litter from the two patches are expected to have
1. nearly equal means, standard deviations and coefficients of variation
 2. different means, nearly equal standard deviations and coefficients of variation
 3. different means, nearly equal standard deviations and different coefficients of variation
 4. different means, and standard deviations but nearly equal coefficients of variation
161. Which one of the following numbers is a prime number?
1. 183
 2. 121
 3. 157
 4. 10201
162. The graph depicts the petrol prices (in Rs. per litre) for the months April, May and June.



Pick the INCORRECT statement.

1. The highest price never crossed 75
 2. The largest difference between the highest and lowest price was for the month of June
 3. Month of June showed the largest decrease of price between the opening date and closing date price
 4. All depicted prices lie between 70 and 80
163. A traveler to the town reaches a crossroad. Upon asking residents A, B and C for directions to a certain destination, he gets the following responses
- A: turn left
B: do not turn left
C: go straight
- If only one among A, B and C is truthful, the traveller
1. should go left
 2. should go straight
 3. should go right
 4. will not be able to decide between going left or right
164. Which of the following figures can be drawn without lifting the pen from the paper or retracing?



Figure A

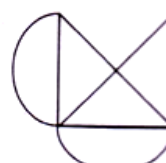



Figure B

1. figure A but not figure B
2. figure B but not figure A
3. both figures A and B
4. neither figure A nor figure B



4. the hot wire has a smaller diameter than the stretched wire

170. The graph below shows the monthly average rainfall and monthly average temperature at a certain place in India. Where is this place most likely to be located?

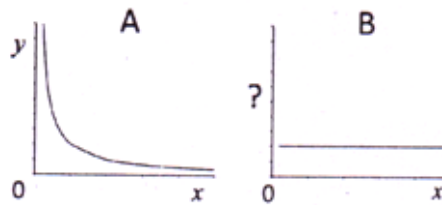


1. On the west coast
2. On the east coast
3. In the north-eastern hills
4. In the Himalayan foothills

171. Two parallel chords of length 8 cm and 6 cm of a circle are separated by a distance of 1 cm. the radius of the circle (in cm) is

1. 4
2. $4\sqrt{2}$
3. 5
4. $5\sqrt{2}$

172. Graphs A and B define the same relationship between y and x for $x, y > 0$.



The variable on the ordinate of graph B is

1. $\frac{1}{x}$
2. x^2
3. $\frac{x}{y}$
4. xy

173. The value of a physical quantity is measured to be 3.4587 ± 0.0022 . Which one of the following is the appropriate representation of the result taking the errors in account?

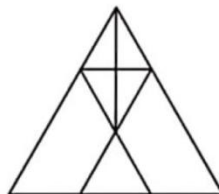
1. 3.4567
2. 3.457
3. 3.46
4. 3.5

174. The cross-section along two mutually perpendicular axes of a solid object are a circle and a square, respectively. The object is

1. a truncated cone
2. a cylinder
3. a rhomboid
4. a cube


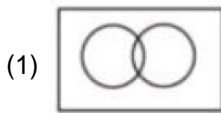
UGC PAPER DEC – 2019

175. The number of triangles in the figure is



- (1) 9
(2) 10
(3) 11
(4) 12

176. Which among the following diagrams can represent the relationships between houses, offices and buildings?



177. In a population of 900, the number of married couples is as much as the number of singles. There are 100 twins of which 50 twins are singles. The population has 400 females in all. What is the number of married persons?
 (1) 325 (2) 600 (3) 250 (4) 300

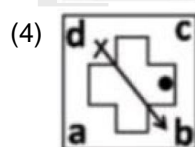
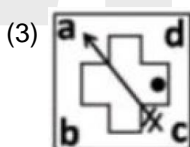
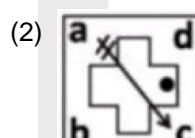
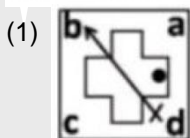
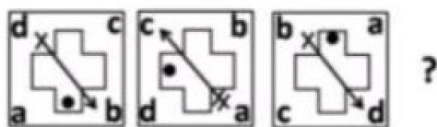
178. The length of a rod is measured repeatedly by two persons. Person A reports the length to be 1002 ± 1 cm while person B reports the length to be 1001 ± 2 cm. It is known from a more reliable method that the length is 1000.1 ± 0.5 cm. Which one of the following statements is correct?
 (1) Measurements made by B are less accurate, but more precise, compared to those by A.
 (2) Measurements made by A are less accurate, but more precise, compared to those by B.
 (3) Measurements made by B are more precise and more accurate, compared to those by A.
 (4) Measurements made by A are more precise and more accurate, compared to those by B.

179. Examine the following statements:
 (a) Fat cells normally produce hormone A in proportion to the amount of fat. Obese individuals, however, have lower than normal levels of hormone A.
 (b) Hormone A reduces food intake.
 Which among the following is a valid inference based on the above statements?
 (1) Impaired production of hormone A causes obesity
 (2) Impaired action of hormone A causes obesity
 (3) Obesity results into low levels of hormone A
 (4) Excess food intake causes depletion of hormone A

180. The difference, the sum and the product of two integers are in the proportion 1.3:10. The two integers are:
 (1) 3, 9 (2) 2, 5 (3) 5, 10 (4) 3, 10

181. A, B, C and D are four consecutive points on a circle such that chords $AB = BC = CD = 10.0$ cm and $DA = 20.0$ cm. The radius of the circle (in cm) is
 (1) 10.0 (2) $10\sqrt{2}$ (3) $10\sqrt{3}$ (4) 20.0

182. Find out the next figure in following sequence?





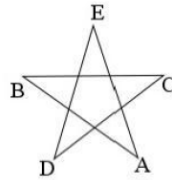
183. A dart is randomly thrown at a circular board on which two concentric rings of radii R and $2R$ having the same width (width much less than R) are marked. The probability of the dart hitting the smaller ring is
- (1) twice the probability that it hits the larger ring
 - (2) half of the probability that it hits the larger ring
 - (3) four times the probability that it hits the larger ring
 - (4) one-fourth the probability that it hits the larger ring

184. The difference between the squares of two consecutive integers is 408235. The sum of the numbers is
- (1) 16324
 - (2) 27061
 - (3) 180235
 - (4) 408235

185. The graph below shows the rainfall and temperature at a place over one week. Which day of the week would feel the most humid?



- (1) Monday
 - (2) Wednesday
 - (3) Thursday
 - (4) Saturday
186. Consider a location on the Earth where the Sun is overhead at noon. Compared to its shadow at 10.00 AM, the shadow of a tower at 4.00 PM would be
- (1) twice longer
 - (2) three times longer
 - (3) four times longer
 - (4) eight times longer
187. A tells B, "I could be visiting you on any day in the next two months and you must give me gold coins of as much total weight in grams as the number of days that would elapse from today." If gold coins are available in integer gram weights, what is the least number of coins with which B can meet A's demand on any day?
- (1) 31
 - (2) 7
 - (3) 6
 - (4) 13
188. There are nine identical balls, one of which is heavier than the other eight. What is the least number of weighings, using a two-pan balance, needed for definitely identifying the heavier ball?
- (1) One
 - (2) Two
 - (3) Three
 - (4) Four
189. A partially filled hour glass has water falling from the upper bowl to the lower bowl. Which of the following statements is correct?
- (1) The level of water rises in the lower bowl at the same rate as the fall in the upper bowl
 - (2) The level of water rises in the lower bowl at the half rate as the fall in the upper bowl
 - (3) The rate of increase in the volume of water in the lower bowl is the same as the rate of decrease in the upper bowl.
 - (4) The area of top surface of the water column is the same in both bowls at all times.
190. Seven chairs numbered 1 to 7 are placed around a round table. Starting from chair number 5, a person keeps going around the table anticlockwise. After crossing 41 chairs, the person will reach the chair number.
- (1) 1
 - (2) 3
 - (3) 5
 - (4) 7



The angle $\angle ABC$ is

1. 48° 2. 72° 3. 54° 4. 36°

- 214.** On a 200 m long straight road, maximum number of poles are fixed at 20 m interval. How many of these poles should be removed in order to have maximum number of poles at an interval of 40 m on the road?

1. 8 2. 6 3. 5 4. 4

UGC PAPER JUNE – 2021

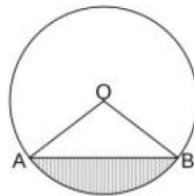
- 215.** A book has 40 pages and each page has x lines. If the number of lines were reduced by 2 in each page, the number of pages would increase by 10 for the identical text. What is the value of x?

1. 7 2. 10 3. 20 4. 30

- 216.** If all the planets in our solar system were to move in the same plane, it would necessarily imply that

1. The Sun is at the center of the solar system
2. The visible planets will appear aligned along a straight line in the sky as seen from the earth
3. Motion of planets is governed by Newton's law of gravity
4. The radii of the orbits of the planets are in harmonic progression

- 217.** As shown in the figure, a chord AB of circle of unit radius subtends at angle of 90° at the center o. The area of the shaded region is



1. $\frac{1}{2}\left(\pi - \frac{1}{2}\right)$ 2. $\frac{1}{4}(\pi - 2)$
3. $\frac{1}{2}(\pi - 2)$ 4. $\frac{1}{4}\left(\pi - \frac{1}{2}\right)$

- 218.** A piece in a board game starts at the centre of the board having 5×5 squares. The piece can be moved one square horizontally or vertically in one move. If all its moves are random, the chance that it will be in one of the outer squares at the end of 2 move is

1. $1/4$ 2. $2/3$ 3. $16/25$ 4. $1/2$

- 219.** An appropriate Venn diagram to represent the relationships between the categories 'inflammable substance', 'water', 'petrol' and 'liquid' is

1. 2. 3. 4.



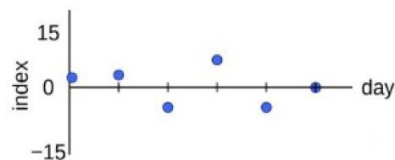
1. 200/4

2. 100/3

3. 900/7

4. 300/2

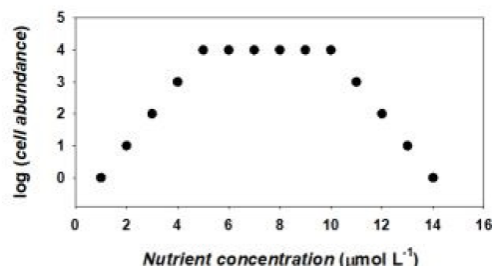
- 227.** Water from a completely filled cylindrical jar is poured into smaller cylindrical jars having $1/10^{\text{th}}$ of its diameter but same height. How many smaller jars can be completely filled with water?
 1. 10
 2. 31
 3. 100
 4. 314
- 228.** At a particular location, a mobile app shows that there are 6, 13, 28 and 50 infected persons with radii of 1, 2, 3, and 4 km, respectively. Within which radius is the density of infected persons the largest?
 1. 1 km
 2. 2 km
 3. 3 km
 4. 4 km
- 229.** A and B have coins of Rs. 1, Rs. 2, Rs. 5 and Rs. 10, in the ratio 4:3:6:2 and 3:5:7:3, respectively. A has Rs. 6/- more than B. Which of the following can be the number of coins with A and B, respectively?
 1. 42, 36
 2. 45, 54
 3. 60, 54
 4. 60, 72
- 230.** Six indistinguishable balls are to be distributed amongst A, B and C, such that each gets at least one. Then the number of ways to make this distribution is
 1. 6
 2. 10
 3. 18
 4. 15
- 231.** The graph shows the day-on-day changes in a certain index.



Which of the following is the correct graph of the rate of change of the index?

- 1.
- 2.
- 3.
- 4.

- 232.** The figure shows the result of an experiment in which cells of a certain bacterium were grown in different nutrient concentrations while keeping all other parameters constant. Which of the following inferences is correct?

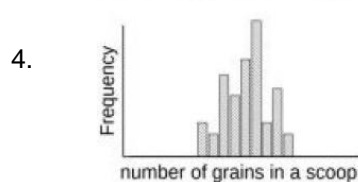
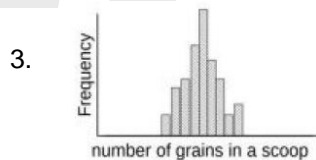
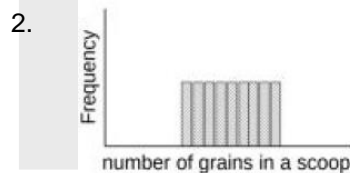
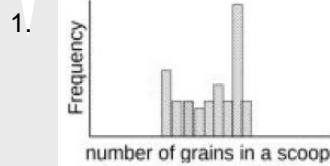


1. Nutrients do not have any role in cell growth.
 2. There is a linear increase in cell abundance at low nutrient concentrations.



3. Cell abundance was limited by the availability of nutrients but a high nutrient concentration seems toxic for the bacteria.
4. Cell abundance decreased rapidly once nutrient concentration reached $5 \mu \text{mol L}^{-1}$.

233. An experiment is done to count the number of small grains that make up a level scoop, taking adequate precautions. If the measurements are repeated several times, which of the following frequency distributions is most unlikely to occur



234. Section A has 24 students. If one student of this section is exchanged for another in Section B, then the average mark of A is increased by 1.25, while that of B reduced by 1. The number of students in Section B is

1. 16
2. 20
3. 25
4. 30

UGC PAPER JUNE – 2022

235. A ranks 10th from both the top and the bottom in merit among the girls in her class. B ranks 6th from the top and 16th from the bottom among boys in the same class. If A is immediately ahead of B in merit order, her rank in the entire class would be

1. 16th from the top and 26th from the bottom
2. 15th from the top and 26th from the bottom
3. 15th from the top and 27th from the bottom
4. 16th from the top and 27th from the bottom

236. In a test with multiple choice questions, candidates get 4 marks for a correct answer and lost 1 mark for an incorrect answer. Two candidates A and B attempting 18 and 13 questions, respectively, secure equal marks. How many more INCORRECT answers does A have compared to B?

1. 3
2. 4
3. 5
4. 6

237. If 90 people are to be seated randomly in 15 rows of 6 seats each, what is the probability that a person gets a seat at either end of a row?

1. $1/2$
2. $1/4$
3. $1/3$
4. $1/15$

238. A 360 ml aqueous solution contains 40% alcohol. How much will be the approximate percentage of alcohol if 3600 ml of water is added to the solution?

1. 2.6
2. 3.6
3. 4.0
4. 1.0

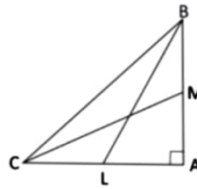
239. The arithmetic mean of five numbers is zero. The numbers may not be distinct. Which of the following must be true?

1. The product of the numbers is zero
2. At most two of these numbers are positive
3. There cannot be exactly one zero
4. There cannot be exactly one non-zero number

240. A 5 kg watermelon contains 99% water by weight. Some of the water evaporates and the melon now contains 98% water by weight. What is the weight (in kg) of watermelon now?

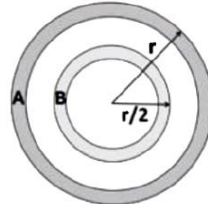
1. 4.5
2. 2.5
3. 4.8
4. 4.9

241. Consider a right angled triangle BAC with medians CM and BL having the same length. The ratio of the length of BC to that of ML is



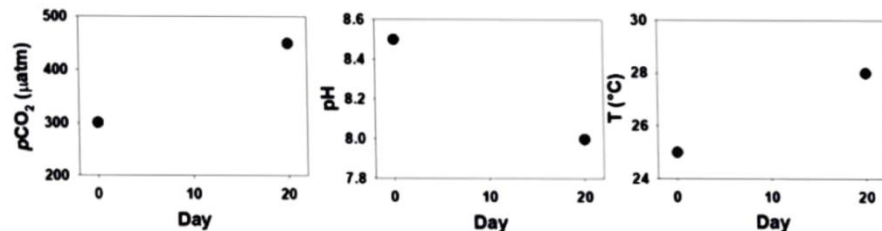
1. 2 2. $3/4$ 3. $4/3$ 4. 1

242. There are two concentric circular tracks A and B of width 2 m each as shown in the figure. If $r = 30$ m, what is the ratio of the areas of Track A to Track B?



1. $28/13$ 2. $2/1$ 3. $29/14$ 4. $5/3$

243. Given figure represents pH, partial pressure of CO_2 (pCO_2) and temperature (T) in an experiment conducted in a water sample over 20 days. Which of the following statements can definitely be made based on this experiment?




1. High CO_2 causes global warming
2. High temperature causes acidification
3. There is a decrease in pH and an increase in both T and pCO_2 over 20 days
4. pH and pCO_2 are positively correlated while pH and T are inversely correlated

244. A set of 27 similar looking coins has 26 identical coins and one dummy coin having less weight. What is the minimum number of weighings that will ensure identification of the dummy coin using a two-pan balance?

1. 3 2. 4 3. 5 4. 6

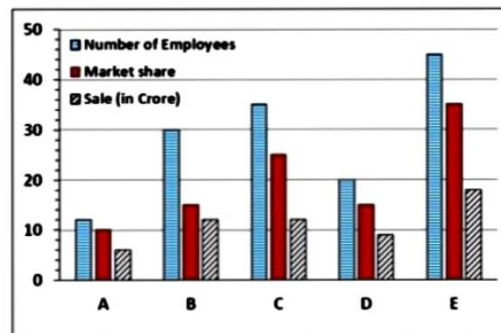
245. An appropriate diagram showing the relationship between the categories FOOD, VEGETABLES, ROOTS and ICE CREAMS is



Select the Correct option



246. The wholesale price per unit of an item is C_0 up to first 19 units. The unit price falls by 10% if 20 to 29 units are purchased and by another 10% if 30 or more units are purchased. If 120 units are bought, the total price paid is approximately
1. $99 C_0$
 2. $97 C_0$
 3. $91 C_0$
 4. $81 C_0$
247. Of all the English magazines published in a country, magazine M is read by the highest number of readers. It necessarily follows that
1. M is the most popular English magazine published in the country
 2. M is the most popular English magazine in the country
 3. M is the most popular magazine in the country
 4. The study has not considered the readership of English magazines published outside the country
248. On a track of 200 m length, S runs from the starting point and R starts 20 m ahead of S at the same time. Both reach the end of the track at the same time. S runs at a uniform speed of 10 m/s. If R also runs at a uniform speed, then how much more time would R take to run the entire course?
1. 0.5 second
 2. 1.0 second
 3. 1.5 seconds
 4. 2.2 seconds
249. A battalion consists of elephants, horses and soldiers totaling to 3500. There are twice as many horses as elephants and one-fourth of the soldiers are riding these animals. In the stand still position, number of feet on ground is 7500. The number of horses in the battalion is
1. 525
 2. 625
 3. 550
 4. 600
250. Two digital clocks show times 09h 13m and 09h 17m, respectively, at one instant. Exactly 30 seconds later the clocks show 09 h 14 m and 09g 17 m, respectively. Which one of the following options is a possible difference between the times maintained by the two clocks?
1. 3 m 00 s
 2. 30 s
 3. 4 m 00 s
 4. 4 m 30 s
251. The graph shows number of employees, market share (as % by number of units sold), and sale (in Rs. crore) for five companies A, B, C, D, E.



- Select the correct statement
1. A has the highest market share per employee, C has the highest sale for its market share
 2. C has the highest market share per employee, B has the highest sale for its market share
 3. D has the highest market share per employee, E has the highest sale for its market share
 4. A has the highest market share per employee, B has the highest sale for its market share
252. Consider the following four statements
- Statement 1: "Statement 3 is true."
Statement 2: "Statement 1 is true"
Statement 3: "Statement 1 is true and Statement 2 is false"
Statement 4: "Statement 1, 2 and 3 are false"
- Which of the above statements must be true for the four statements to be mutually consistent?
1. Statement 1
 2. Statement 2
 3. Statement 3
 4. Statement 4

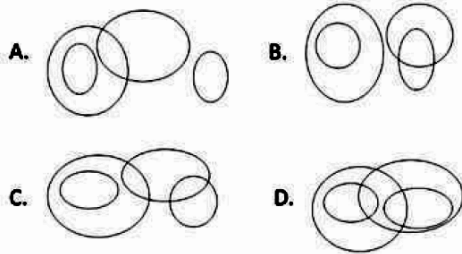


3. A and D with the support of independents get the majority.
4. An MLA from E can become Chief Minister.

262. In an examination containing 10 questions, each correct answer is awarded 2 marks, each incorrect answer is awarded -1 and each unattempted question is awarded zero. Which of the following CANNOT be a possible score in the examination?

1. -9 2. -7 3. 17 4. 19

263. An appropriate diagram to depict the relationships between the categories INSECTS, BIRDS, EXTINCT ANIMALS and PEACOCKS is



1. A 2. B 3. C 4. D

264. The ratio of ages of a mother and daughter is 14:1 at present. After four years, the ratio of their ages will be 16:3. What was the age of mother when the daughter was born?

1. 26 2. 28 3. 30 4. 32

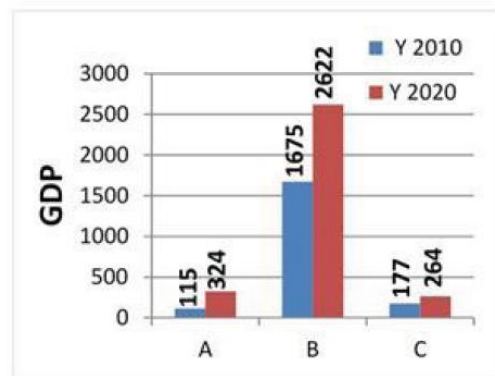
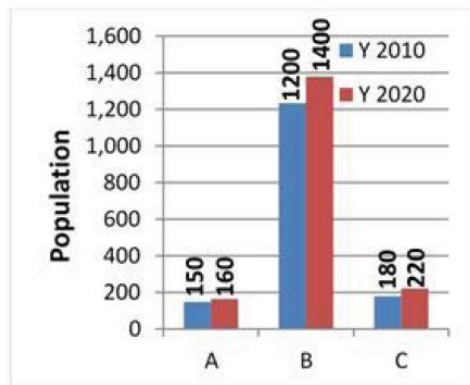
265. Person A tells the truth 30% of the times and B tells the truth 40% of the times, independently. What is the minimum probability that they would contradict each other?

1. 0.18 2. 0.42 3. 0.46 4. 0.50

266. A device needs 4 batteries to run. Each battery runs for 2 days. If there are a total of 6 batteries available, what is the maximum number of days for which the device can be run by strategically replacing the batteries till all the batteries are completely drained of power?

1. 2 2. 3 3. 4 4. 5

267. The populations and gross domestic products (GDP) in billion USD of three countries A, B and C in the years 2010 and 2020 are shown in the two figures below.



In terms of increase in per capita GDP from 2010-2020, their ranking from high to low is

1. A, B, C 2. B, A, C
3. B, C, A 4. C, A, B

268. A and B have in their collection, coins of Re. 1, Rs. 2, Rs. 5 and Rs. 10 in the ratio 3 : 2 : 2 : 1 and 4 : 3 : 2 : 1, respectively. The total number of coins with each of them is equal. If the value of coins with A is Rs. 270/-, what is the value of the coins (in Rs.) with B?



1. 213 2. 240 3. 275 4. 282


269. If the speed of a train is increased by 20%, its travel time between two stations reduces by 2 hrs. If its speed is decreased by 20%, the travel time increases by 3 hrs. What is the normal duration of travel (in hrs)?

1. 11.5 2. 12.0 3. 13.2 4. 14.0

270. In a group of 7 people, 4 have exactly one sibling and 3 have exactly two siblings. Two people selected at random from the group, what is the probability that they are NOT siblings?

1. $\frac{5}{21}$ 2. $\frac{16}{21}$ 3. $\frac{3}{7}$ 4. $\frac{4}{7}$

271. Five identical incompressible spheres of radius 1 unit are stacked in a pyramidal form as shown in the figure. The height of the structure is



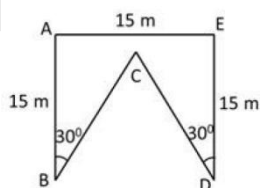
Top view

1. $2 + \sqrt{2}$ 2. $2 + \sqrt{3}$ 3. $2 + 2\sqrt{2/3}$ 4. 3

272. Two datasets A and B have the same mean. Which of the following MUST be true?

1. Sum of the observations in A = Sum of the observations in B.
2. Mean of the squares of the observations in A = Mean of the squares of the observations in B.
3. If the two datasets are combined, then the mean of the combined dataset = mean of A + mean of B.
4. If the two datasets are combined, then the mean of the combined dataset = mean of A.

273. The figure shows map of a field bounded by ABCDE. If AB and DE are perpendicular to AE, then the perimeter of the field is



1. 70 m 2. 75 m 3. 80 m 4. 85 m

274. In a meeting of 45 people, there are 40 people who know one another and the remaining know no one. People who know each other only hug, whereas those who do not know each other only shake hands. How many handshakes occur in this meeting?

1. 225 2. 10 3. 210 4. 200

UGC PAPER DECEMBER – 2023

275. In the following finite sequence of integers, how many terms are divisible by their immediately preceding terms?

8, 3, 4, 9, 3, 5, 9, 5, 9, 9, 4, 5, 6, 3, 3, 5, 7, 2, 3, 9, 9

1. 3 2. 4 3. 5 4. 6

276. Rounding off 4.58500001 to the second decimal place will give

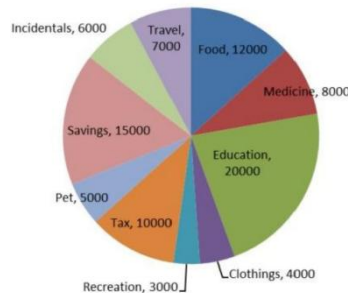
1. 4.6 2. 4.58 3. 4.59 4. 4.585

277. Four students Akash, Bikram, Ramesh and Dewan joined a college in 1991, 1992, 1993 and 1994 but not necessarily in that order. Each student joined one of the four departments viz. Physics, Chemistry,



Mathematics and Biology. No two students joined the same department. One of those who joined the college before 1993 joined Chemistry. No one joined the college after Ramesh. Dewan joined Physics. Akash joined one year after Dewan but didn't join Chemistry. The student who joined in 1992, joined the department of

1. Physics 2. Chemistry 3. Mathematics 4. Biology
- 278.** Two rectangular pieces of land both having all sides and diagonals in whole numbers in meters have areas in the ratio 4 : 3 and the smaller (in area) piece has diagonal 41m and one side 9m. However, the bigger piece has a smaller diagonal. The diagonal of the bigger piece is
1. 25 4. 29 5. 32 6. 34
- 279.** Average monthly expenses (in rupees) incurred by a family are as shown in the chart.



- What is the value of the central angle corresponding to the amount spent on recreation?
1. 12° 2. 13° 3. 14° 4. 15°
- 280.** Train travel time between stations A and B is 39 hours. Every day a pair of trains leave from A to B and B to A at 6 AM. If the service starts on a Monday, on which earliest day will the same train rakes start the journeys again from their original stations?
1. Wednesday 2. Thursday 3. Friday 4. Saturday
- 281.** Consider two 24-hour clocks A and B. Clock A gets faster by 8 min and Clock B gets slower by 12 min every hour. They are synchronized to the correct time at 05:00 hrs. Within the following 24 hours at a certain instant Clock A shows 15:12 hrs and Clock B shows 12:12 hrs. What is the true time at that instant?
1. 13:48 2. 14:00 3. 14:12 4. 14:36
- 282.** In a family of four, the engineer is the son of the chemist and brother of the teacher. The chemist is the wife of the lawyer and the mother of the teacher. Which of the following conclusions is necessarily true?
1. The teacher is the sister of the engineer.
2. The teacher is the son of the chemist.
3. The lawyer is the father of the teacher.
4. The lawyer is the brother of the teacher.
- 283.** Consider the equation $3^x - 3^y = 3^4$. A solution to this equation with x and y integers
1. satisfies $x > 4, y > 4$ 2. satisfies $x > 5, y > 3$
3. satisfies $x > 6, y > 2$ 4. is not possible
- 284.** The following 13 observations are molecular weights of 13 compounds (in amu):
65, 61, 63, 65, 61, 60, 65, 83, 65, 84, 61, 65, 62
Which of the following is true of the molecular weights?
1. Mean = Median < Mode 2. Median < Mode = Mean
3. Mode = Median < Mean 4. Median < Mean < Mode
- 285.** Which of the following powers of 3 is the largest factor of
 $1 \times 2 \times 3 \times 4 \times \dots \times 30$?
1. 3^{10} 2. 3^{13} 3. 3^{14} 4. 3^{15}



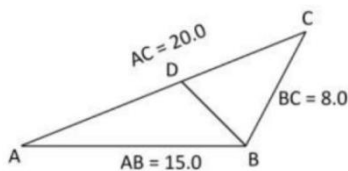
286. Which of the integers 10, 11, 12 and 13 can be written as the sum of squares of four integers (allowing repetition)?
1. Only 10 2. Only 10 and 11 3. Only 10, 11 and 12 4. All

287. In a queue each woman is preceded and followed by exactly two men. A particular woman is positioned, from among the women, fourth from the front. The woman's position in the queue from the front is
1. 9th 2. 10th 3. 11th 4. 12th

288. Sets x_1, x_2, \dots, x_{100} and y_1, y_2, \dots, y_{150} have means zero and the same standard deviations. Which of the following is the ratio of $\sum_{i=1}^{100} x_i^2$ to $\sum_{i=1}^{150} y_i^2$ closest to?
1. 1 : 1 2. $\sqrt{2} : \sqrt{3}$ 3. 2 : 3 4. 4 : 9

289. When an alarm goes off, policemen X and Y chase thief T, on foot and on a cycle respectively, along the same straight road. Initially the distance between X and Y was 4 times that between T and X. If X runs twice as fast as T and Y rides twice as fast as X, then
1. X and Y will catch up with T at the same time 2. X will catch T first
3. Y will catch T first 4. Y will cross X during the chase

290. In the figure $\triangle ABC$ and $\triangle BDC$ are similar.



Then $BD = ?$

1. 8.0 2. 7.2 3. 7.5 4. 6.0

291. Every day a child adds to her piggy bank the same number of coin as are already there in it. If she starts with one coin then the piggy-bank gets full in 8 days. The number of days it will take to fill if she starts with two coins, is
1. 4 2. 5 3. 6 4. 7

292. In a grid puzzle, each row and column in the 9×9 grid, as well as each 3×3 sub-grid shown with heavy borders, must contain all the digits 1 – 9.

	8		4	9	6	5	3	
6	4	2	8			7		
				?	8			
		7		5		4	2	
			7	1				
8	5		6			1		
		6						
	1			4	7	3	6	
2	7	3	5	6	8		1	

In the above partially filled grid, the square marked “?” contains

1. 2 2. 3 3. 6 4. 7

293. From a two-digit number, the sum of its digits is subtracted. The resulting number is
1. always divisible by 6 2. always divisible by 9
3. never divisible by 4 4. never divisible by 5



294. Two cylindrical candles have unequal heights and diameters. The shorter lasts for 13 hours and the longer for 9 hours. They are lit at the same time and after 5 hours their heights are the same. What is the ratio of their original heights?

1. 1 : 2 2. 13 : 18 3. 9 : 13 4. $\sqrt{5} : 3$

UGC PAPER JUNE – 2024

295. In a class of 30 students, those with roll numbers 1 to 20 secure an average of 72% marks, while those with roll numbers 11 to 30 secure an average of 75% marks. If the average marks of the entire class are 70%, what is the average marks of roll numbers 11 to 20 (in percent)?

1. 68 2. 74 3. 78 4. 84

296. By selling two items at the same price, a person gains 20% on one item and loses 20% on the other. Then over all

1. he neither loses nor gains 2. he loses 5%
3. he loses 4% 4. he gains 4%

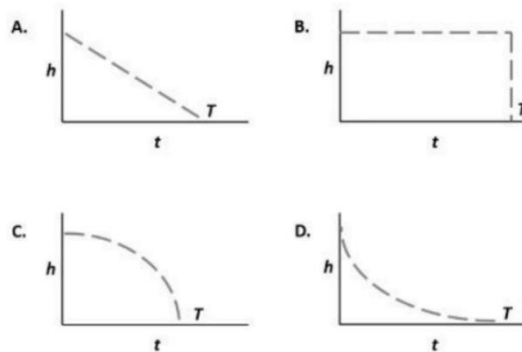
297. In a district, every second teacher who teaches chemistry also teaches physics and every third teacher who teaches physics also teaches chemistry. The ratio of teachers who only teach chemistry to those who only teach physics is

1. 3:2 2. 1:2
3. 2:3 4. 2:1

298. An athlete running on a track falls short of the finish line by 10 m when she runs at a constant speed for a given time. If she increases her speed by 20%, she overshoots by 20 m in the same time. What is the length of the track?

1. 134 m 2. 156 m 3. 160 m 4. 164 m

299. A cylindrical container has a tiny hole at the bottom. The container is initially filled to its brim with water. If T is the time taken for it to be completely emptied, the graph of height of the water column as a function of time is closest to



1. A 2. B 3. C 4. D

300. Rajesh went to Sunil's house situated 1 km North-East of his house. From there, he went to Arjun's house that is situated 707 m South of Sunil's house. What is the distance between Rajesh's current location and his house (to the nearest metre)?

1. 800 m 2. 600 m 3. 707 m 4. 1000 m

301. An experiment consists of tossing four fair coins independently. The outcome of the experiment is considered favourable, if the number of heads is greater than the number of tails. The probability of a favourable outcome from a single experiment is

1. $\frac{1}{2}$ 2. $\frac{3}{16}$ 3. $\frac{5}{16}$ 4. $\frac{3}{4}$



302. Among finches males and females have one of the three colors – Red, Blue or Yellow – on their head. During the mating season, males and females pair up randomly. For a large population of finches with 50% red, 30% blue and 20% yellow coloured individuals among both males and females, what is the expected number of pairings between red males and yellow females if the total number of pairs formed is 10000?

1. 2500 2. 1500 3. 1000 4. 600

303. The length of bristlemouth fish is uniformly distributed between 2 and 4 inches. If a fisherman randomly catches 5 bristlemouth fishes, what is the probability that at least one of them will be 3 inches or longer?

1. 0.03125 2. 0.15625 3. 0.84375 4. 0.96875

304. The diagrams show the distribution of trees in two forest patches A and B. Each patch is divided into smaller “quadrats”. The number of trees in each quadrat is shown. Which one of the following statements about the means (μ) and standard deviations (σ) of the numbers of trees in the two patches is true?

Forest Patch A

1	1	1	1	1
1	1	1	1	1
1	1	1	1	1
1	1	1	1	1
1	1	1	1	1

Forest Patch B

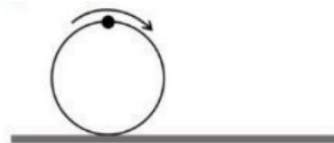
2	0	0	0	0
0	0	0	0	0
0	0	0	7	0
0	10	0	0	0
0	0	0	0	6

1. $\mu(A) = \mu(B), \sigma(A) = \sigma(B)$ 2. $\mu(A) > \mu(B), \sigma(A) > \sigma(B)$
 3. $\mu(A) = \mu(B), \sigma(A) < \sigma(B)$ 4. $\mu(A) < \mu(B), \sigma(A) < \sigma(B)$

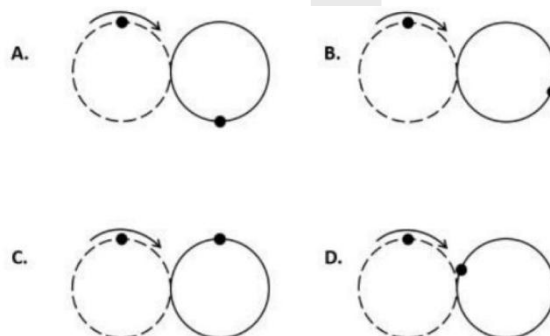
305. What would be the minimum number of notes for Rs. 4849 if notes are available only in denominations of Rs. 2, 5, 20, 50, 500?

1. 19 2. 20 3. 21 4. 22

306. A ring is rolling along a straight track as shown. The topmost point of the ring is marked.



Which of the diagrams shows a possible position of the ring at a later time, relative to the original position (shown by dashed circle)?



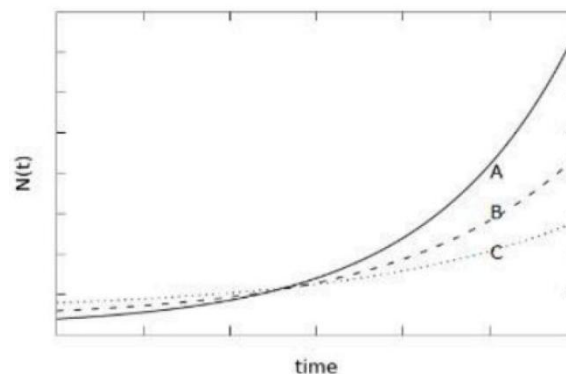
1. A 2. B 3. C 4. D

307. A group of 540 persons is to be seated row wise such that the number of persons in each row is 4 less than in the previous row. Which of the following number of rows is not possible?

1. 5 2. 6 3. 8 4. 9



308. Out of a class of 100 students who can speak at least one of English or Hindi, 41 students can speak English. 21 students can speak both English and Hindi. How many students can speak Hindi?
1. 58 2. 80 3. 59 4. 38
309. The son was born when his mother was 28 years old. The father is older to the mother by 4 years. If the current ages of the father and mother are in the ratio 9:8, what is the current age (in years) of the son?
1. 2 2. 3 3. 4 4. 5
310. In a class, among the boys B is taller than 10 boys, but shorter than 13 others. Among girls, G is taller than 6 girls, but shorter than 8 others. Two boys and three girls are shorter than B, but taller than G. If no two persons have the same height, then in the entire class, B is
1. taller than 21, but shorter than 18 others
2. taller than 20, but shorter than 18 others
3. taller than 20, but shorter than 19 others
4. taller than 19, but shorter than 19 others
311. The hypotenuse of a right triangle, whose sides are integers, is 17 cm. Its area in sq. cm is
1. not calculable due to insufficient data 2. 60
3. 68 4. 225
312. On a one-way road, to demarcate 4 lanes, line segments of 3.5 m length are painted with gaps of 3.5 m along the length of the road. What is the total length of the painted lines (in m) over a 350 m stretch of the road?
1. 300 2. 400 3. 525 4. 700
313. The graph shows the growth curves for three independent populations (A, B and C). The growth model for each of these populations is $N(t) = N_0 e^{rt}$ where $N(t)$ is the population at time t , N_0 is the initial population and r is the per capita growth rate.



If r_A , r_B , r_C are the intrinsic growth rates of populations A, B and C respectively, which of these statements is true?

1. $r_A = r_B = r_C$ 2. $r_A > r_B = r_C$ 3. $r_A = r_B > r_C$ 4. $r_A > r_B > r_C$

UGC PAPER DEC – 2024

314. Choose the best alternative:
CURRY is to SPICE as _____ is to COLOUR
1. CANVAS 2. PAINTING 3. BRUSH 4. BRIGHTNESS
315. A spherical ball is placed inside a cubic box. If the diameter of the ball is same as the sides of the box, what approximate percentage of volume will be empty ?
(1) 12% (2) 24% (3) 36% (4) 48%

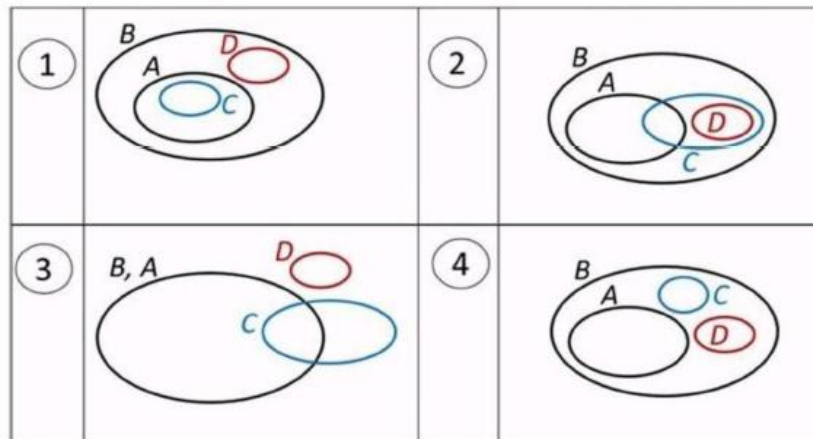


- 316.** Choose the correct chronological order of the following:
A:match , B: trophy, C: toss, D:result.
1. C,A,D,B 2. A,D,B,C 3. C,B,A,D 4. D,C,B,A
- 317.** Frank, Sam, Tom and David came first, second, third and fourth in a race but not necessarily in this order. Only one had first letter of position matching that of his name. If Tom Came first and Sam did not come second then
1. David came third 2. Frank came fourth
3. David came fourth 4. Sam came fourth
- 318.** How many 4-digit numbers can be generated from the digits 1,2,3,4,5 such that no digit appears more than once, and digit 1 is always somewhere to the left of the digit 2?
1. 72 2. 36
3. 12 4. 6
- 319.** Choose the option to fill in the blank that will make the following statement logically correct:
THE NUMBER OF OCCURRENCES OF THE LETTER "N" IN THIS SENTENCE IS CORRECTLY COUNTED AS.....
1. SIX 2. SEVEN 3.EIGHT 4. NINE
- 320.** Which of the following pie-charts depicts the distribution of students in the five subjects such that physics and chemistry get equal number of students, 40% of the total go to the life sciences and remaining are equally divided into maths and earth sciences?
- 1.
- 2.
- 3.
- 4.
- 321.** Fifteen distinct points are randomly placed on the circumference of a circle. How many distinct straight lines at the most can be formed by pairs among these points?
1. 105 2. 455 3.30 4. 210
- 322.** A water bottle costs Rs.20 that includes cost of the bottle. If the water costs Rs 15 more than the bottle, then what is the cost of the bottle?
1. Rs. 2.50 2. Rs. 5 3.Rs. 7.50 4.Rs. 10
- 323.** The average of seven numbers is 71. If We exclude one of these numbers, the average becomes 75. What is that number ?
1. 75 2. 74 3.73 4.47
- 324.** In a board meeting of 20 directors, 6 shook everyone else's hands but the remaining 14 did not shake each another's. The total number of handshakes in the meeting was
(1)26 (2)84 (3)99 (4)190
- 325.** If water of pH 8 is diluted 100 times with neutral water (pH=7) then it will
1. become acidic 2. remain basic
3. become neutral 4. become heavy

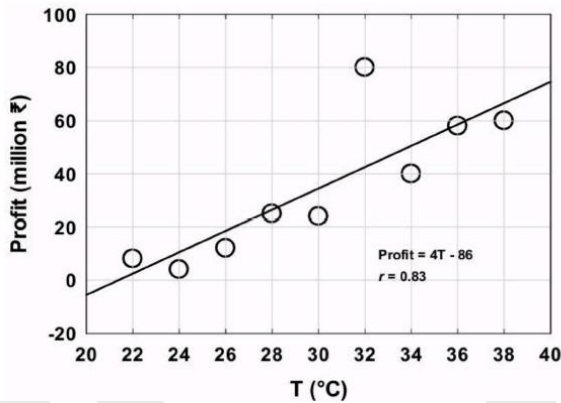


- 326.** If a map is placed in such a manner that southwest becomes east, then what will north become?
 1. Northeast 2. Southwest 3. Northwest 4. Southeast
- 327.** A square sheet of 10 cm sides is folded along its diagonal to form an isosceles right triangle, and then hypotenuses are folded successively two times to form isosceles right triangles. What is the length of each equal side after the third folding ?
 1. 0.625 cm 2. 1.25 cm 3. 2.5 cm 4. 5 cm
- 328.** The words TEST, EXAM and EAST are coded as 1382, 2182 and 1937 but not necessarily in that order. How would the word MATE be coded?
 1. 9321 2. 7321 3. 7312 4. 1982
- 329.** All those who pass on entrance test take admission into a certain institute. Out of these, some graduate with a degree in 2 years while some fail and are removed, and all graduates from that institute get jobs in the same year. In 2022, no one took admission in that institute. Which of the following does NOT follow necessarily?
 1. No one wrote the entrance test in 2022
 2. No one passed the entrance test in 2022
 3. No one graduated from the institute in 2024
 4. No one got a job from the institute in 2024

- 330.** Which one of the following Venn diagrams is NOT consistent with the following statements?
 All A are B
 No D is A
 Some A are C



- 331.** If I walked east 100 metres, turned right and walked 60 metres, turned left and walked 150 metres and turned left again, I would be facing
 1. East 2. North 3. West 4. South
- 332.** In a population of microbial cells, the initial population is 50, and the growth rate is 0.1 per hour. If the population grows exponentially, what will the approximate size of the population be after 10 hours?
 1. 51 2. 82 3. 136 4. 156
- 333.** In the fictional country of Numberia, which of the following provinces is the odd one out
 1. SONECON 2. CUGHUSTER
 3. FATWOHUM 4. CAFIVENGUS
- 334.** The given figure shows data points and a line fit by least squared method between profit in ice-cream business and mean temperature (T) for a city. Which one of the following inferences can definitely be drawn?(The correlation coefficient r is also given in the figure)



1. The sum of the squared values of differences between the observed and expected values of temperature is the minimum.
2. 83% of the variation in profit is explained by the variation in temperature.
3. Rise in temperature causes profit to increase.
4. At 25° C, estimated profit is 14 million ₹.

UGC PAPER JUNE – 2025

- 335.** The value of a company is measured as the total value of its shares owned by different investors. Rakesh owns $\frac{2}{15}$ of the shares of a company. He sells $\frac{1}{3}$ of his shares for Rs. 75,000/-. What is the total value of the company at that time?
1. Rs. 15,75,800
 2. Rs. 16,87,500
 3. Rs. 17,75,800
 4. Rs. 18,27,500
- 336.** A cylindrical container of radius 20 cm was filled with water up to 25 cm height. A solid spherical ball of radius 7 cm was then immersed in the water. What would be the approximate increase in water level in the container after the ball was fully immersed?
1. 1.14 cm
 2. 2.28 cm
 3. 5.50 cm
 4. 7.00 cm
- 337.** What will be the digit at the unit's place of $1^3 + 2^3 + 3^3 + 4^3 + 5^3 + 6^3 + 7^3 + 8^3 + 9^3$?
1. 0
 2. 5
 3. 7
 4. 9
- 338.** Kavita starts from her house and walks 200 m northward, then turns 45° right and walks 70 m. After that, she turns 90° right and walks 70 m. Which of the following is the closest value of the shortest distance between Kavita's current location and her house?
1. 296 m
 2. 240 m
 3. 200 m
 4. 223 m
- 339.** Numbers of Rose, Lotus, and Marigold plants in a garden are in the proportion 8:5:7. Later, 75%, 40% and 50% more plants of their respective categories were added. What will be the new proportion of plants, in the same order?
1. 5:3:4
 2. 4:2:3
 3. 5:4:3
 4. 7:4:5
- 340.** Rahul and his father started jogging on a circular track of radius r ($r > 2$). Rahul completed one round and stopped. His father got tired half way into the first round and returned to his starting point along a straight line. What is the ratio of the distances covered by Rahul and his father?
1. $\pi/(\pi + 2)$
 2. $2\pi/(\pi + 2)$
 3. 1
 4. 2
- 341.** Consider the following statements:
Statement I: All Booklets are Manuals.
Statement II: All Manuals are Catalogues.



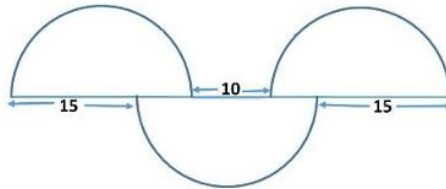
If Statements I and II are True, which one of the following conclusions can be conclusively drawn?

1. All Manuals are Booklets.
2. All Catalogues are Booklets.
3. All Booklets are Catalogues.
4. All Catalogues are Manuals.

342. Suresh asked Ramesh to identify the person in a photo that the latter is holding. Ramesh responds, "I have no brothers or sisters. However, that man's father is my father's son." Who is the person in the photo?

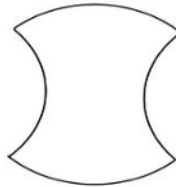
1. Suresh
2. Ramesh
3. Ramesh's son
4. Ramesh's cousin

343. Three identical semi-circles are arranged as shown. What is the diameter of the semi-circles?



1. 5π
2. 20
3. $\frac{15\pi}{2}$
4. 25

344. A circle of radius 1 unit is divided into four quarters and rejoined as shown below.



What is the area of this shape?

1. π
2. 1
3. 2
4. 4

345. A stock market trader has lost two thirds of her investment on a day. Next day she recovered one third of the previous day's loss. What fraction of her initial investment is she left with?

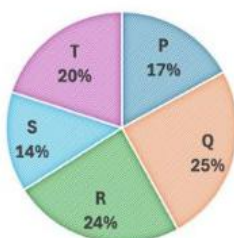
1. $\frac{1}{3}$
2. $\frac{2}{3}$
3. $\frac{2}{9}$
4. $\frac{5}{9}$

346. In a code, the word DELTOID is written as 3152893. Then LOTION could be written as

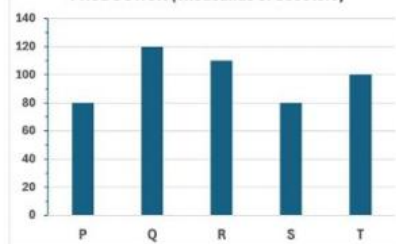
1. 582986
2. 582981
3. 198396
4. 198392

347. The market share (%) and annual production of scooters from five automobile companies P, Q, R, S, and T are shown in graphs.

MARKET SHARE (%)



PRODUCTION (Thousands of Scooters)





If the profit of a company is directly proportional to the ratio of market share to production, then which of the following statements is/are CORRECT?

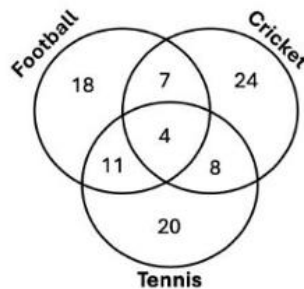
Statement X : Companies T and P have same profit

Statement Y : Company R has the maximum profit

Statement Z : Company S has the minimum profit

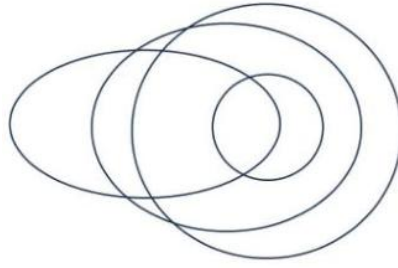
1. X and Y
2. X and Z
3. Y and Z
4. Only Z

348. The given Venn diagram shows numbers of players playing one or more than one sport.



The percentage of players who play exactly two sports is closest to %.

1. 5
 2. 14
 3. 28
 4. 32
349. A car has wheels of diameter 36 cm . If it runs at a speed of 60 km/h, then the rotation per minute (RPM) will be closest to .
1. 884
 2. 898
 3. 906
 4. 986
350. A number is mistakenly divided by 2 instead of being multiplied by 2 . What is the change in the result caused by this mistake?
1. 25%
 2. 50%
 3. 75%
 4. 100%
351. Sum of the digits of a two-digit number 'ab' is subtracted from the number and the result is divided by 9. Then the result of this will be
1. always a
 2. always b
 3. neither a nor b
 4. either a or b depending on a+b
352. The initial monthly salaries of employees John, Riya, and Sunil were in the proportion 4:3:5. After an increase of Rs 10000 monthly to all, the new proportion becomes 6:5:7. What was the initial salary of Sunil?
1. Rs 20000
 2. Rs 25000
 3. Rs 30000
 4. Rs 35000
353. Three friends, Mr. Rahman, Mr. George and Mr. Vedant, met after a long time. They were wearing red, green and violet colour shirts. Mr. Rahman and the person wearing violet shirt noticed that none of the three is wearing a colour that starts with same letter as his name. Which one of the following is the correct match of the persons with the colour of their shirts?
1. Rahman-Violet, George-Red, Vedant-Green
 2. Rahman-Green, George-Violet, Vedant-Red
 3. Rahman-Green, George-Red, Vedant-Violet
 4. Rahman-Red, George-Violet, Vedant-Green
354. The following diagram represents the relationship between four categories.



The categories could be

1. Rivers, water bodies, oceans, sources of evaporation
2. Parliamentarians, celebrities, elected persons, professional politicians
3. Monkeys, four-legged animals, pet animals, land animals
4. Furniture, chairs, seats, wooden objects



CLASS ASSIGNMENT

ANSWER KEY

1. (2)	2. (1)	3. (1)	4. (2)	5. (3)	6. (3)
7. (2)	8. (1)	9. (3)	10. (4)	11. (2)	12. (1)
13. (3)	14. (2)	15. (1)	16. (1)	17. (4)	18. (1)
19. (2)	20. (2)	21. (4)	22. (2)	23. (3)	24. (2)
25. (2)	26. (1)	27. (2)	28. (1)	29. (4)	30. (2)
31. (1)	32. (2)	33. (4)	34. (4)	35. (3)	36. (3)
37. (2)	38. (4)	39. (3)	40. (1)	41. (2)	42. (2)
43. (4)	44. (3)	45. (3)	46. (2)	47. (1)	48. (3)
49. (3)	50. (3)	51. (3)	52. (2)	53. (4)	54. (3)
55. (3)	56. (3)	57. (3)	58. (4)	59. (3)	60. (3)
61. (4)	62. (3)	63. (3)	64. (3)	65. (2)	66. (1)
67. (2)	68. (4)	69. (2)	70. (4)	71. (4)	72. (2)
73. (1)	74. (2)	75. (4)	76. (1)	77. (1)	78. (4)
79. (4)	80. (3)	81. (4)	82. (4)	83. (3)	84. (4)
85. (1)	86. (1)	87. (2)	88. (1)	89. (1)	90. (2)
91. (4)	92. (3)	93. (3)	94. (2)	95. (1)	96. (2)
97. (1)	98. (3)	99. (3)	100. (4)	101. (3)	102. (4)
103. (4)	104. (4)	105. (3)	106. (3)	107. (2)	108. (2)
109. (4)	110. (4)	111. (1)	112. (3)	113. (2)	114. (3)
115. (2)	116. (2)	117. (3)	118. (2)	119. (4)	120. (3)
121. (1)	122. (1)	123. (3)	124. (3)	125. (4)	126. (3)
127. (2)	128. (4)	129. (2)	130. (4)	131. (3)	132. (2)
133. (4)	134. (4)	135. (1)	136. (3)	137. (3)	138. (2)
139. (2)	140. (2)	141. (1)	142. (3)	143. (2)	144. (2)
145. (1)	146. (3)	147. (2)	148. (2)	149. (3)	150. (3)
151. (2)	152. (4)	153. (1)	154. (1)	155. (3)	156. (3)
157. (2)	158. (1)	159. (4)	160. (4)	161. (3)	162. (1)
163. (4)	164. (1)	165. (3)	166. (1)	167. (2)	168. (1)
169. (3)	170. (1)	171. (3)	172. (4)	173. (3)	174. (2)
175.	176.	177.	178.	179.	180.
181.	182.	183.	184.	185.	186.
187.	188.	189.	190.	191.	192.
193.	194.	195.	196.	197.	198.
199.	200.	201.	202.	203.	204.
205.	206.	207.	208.	209.	210.
211.	212.	213.	214.	215.	216.
217.	218.	219.	220.	221.	222.
223.	224.	225.	226.	227.	228.
229.	230.	231.	232.	233.	234.
235.	236.	237.	238.	239.	240.
241.	242.	243.	244.	245.	246.
247.	248.	249.	250.	251.	252.
253.	254.	255. (2)	256. (4)	257. (4)	258. (1)
259. (4)	260. (4)	261. (3)	262. (4)	263. (3)	264. (1)
265. (3)	266. (2)	267. (1)	268. (2)	269. (2)	270. (2)
271. (1)	272. (4)	273. (2)	274. (3)	275.	276.
277.	278.	279.	280.	281.	282.
283.	284.	285.	286.	287.	288.
289.	290.	291.	292.	293.	294.
295.	296.	297.	298.	299.	300.
301.	302.	303.	304.	305.	306.
307.	308.	309.	310.	311.	312.
313.	314.	315. (4)	316. (1)	317. (2)	318. (2)



MOHAN INSTITUTE OF MATHEMATICS

Dedicated To Disseminating Mathematical Knowledge

319.(4)
325.(2)
331.(2)
337.(2)
343.(2)
349.(1)

320.(1)
326.(2)
332.(3)
338.(4)
344.(3)
350.(3)

321.(1)
327.(4)
333.(2)
339.(2)
345.(4)
351.(1)

322.(1)
328.(2)
334.(4)
340.(2)
346.(1)
352.(2)

323.(4)
329.(1)
335.(2)
341.(3)
347.(3)
353.(2)

324.(3)
330.(4)
336.(1)
342.(3)
348.(3)
354.(4)